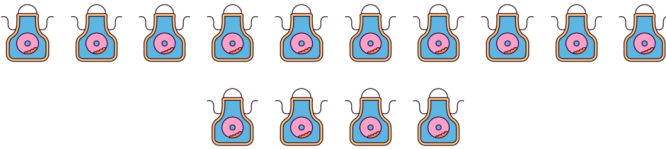








數一數有幾個(20以內)

姓名: _____

日期: _____ 分數: _____

	=	
	=	
	=	
	=	
	=	
	=	
	=	
	=	
	=	
	=	



數一數有幾個(20以內)

姓名: _____

日期: _____ 分數: _____

	=	14
	=	11
	=	18
	=	2
	=	6
	=	8
	=	19
	=	7
	=	5
	=	9