






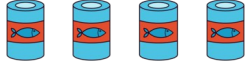






Telle tall 1 til 5

StudentName: \_\_\_\_\_

ExamDate: \_\_\_\_\_ ExamScore: \_\_\_\_\_

|   |     |  |
|---|-----|--|
|    | $=$ |  |
|    | $=$ |  |
|    | $=$ |  |
|    | $=$ |  |
|    | $=$ |  |
|    | $=$ |  |
|  | $=$ |  |
|  | $=$ |  |
|  | $=$ |  |
|  | $=$ |  |