




1から20までの数を数える

名前: _____

日にち: _____ スコア: _____




==



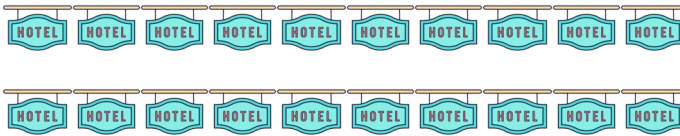
==



==




==



==



==



==



==



==



==




1から20までの数を数える

名前: _____

日にち: _____ スコア: _____




= 5



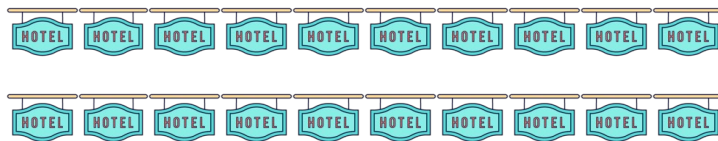
= 19



= 1



= 18



= 20



= 2



= 16



= 8



= 4



= 9