



10までの足し算(絵)

名前: _____

日にち: _____ スコア: _____





















 1	+	 1	=	
 3	+	 2	=	
 4	+	 1	=	
 3	+	 3	=	
 8	+	 2	=	
 1	+	 4	=	
 3	+	 1	=	
 6	+	 3	=	
 2	+	 3	=	
 2	+	 8	=	



10までの足し算(絵)

名前: _____

日にち: _____ スコア: _____

 1	+	 1	=	2
 3	+	 2	=	5
 4	+	 1	=	5
 3	+	 3	=	6
 8	+	 2	=	10
 1	+	 4	=	5
 3	+	 1	=	4
 6	+	 3	=	9
 2	+	 3	=	5
 2	+	 8	=	10