




Nimi: _____

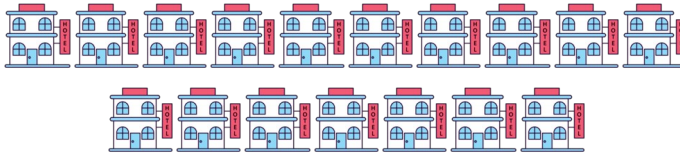
Päivämäärä: _____ Pisteet: _____




=



=



=



=



=



=



=



=



=



=



Nimi: _____

Päivämäärä: _____ Pisteet: _____

	=	7
	=	11
	=	17
	=	12
	=	4
	=	16
	=	3
	=	2
	=	5
	=	8